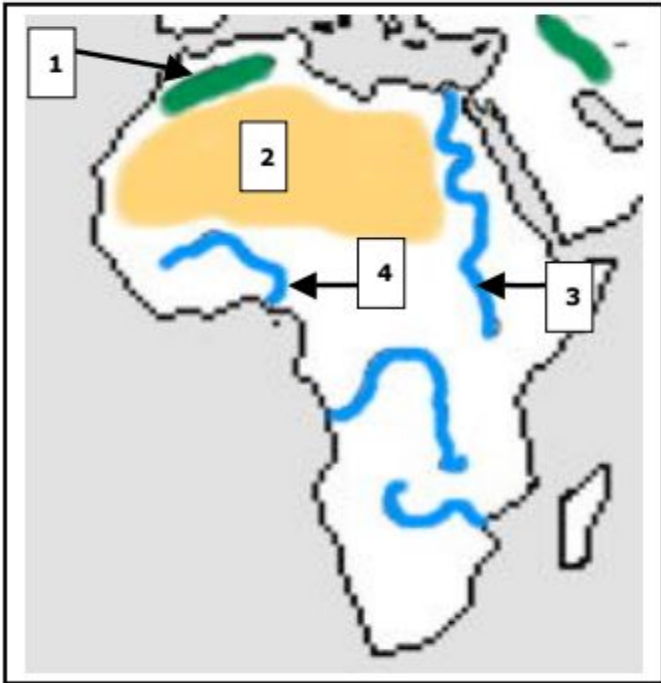


**Directions:** Use the word box to name each numbered geographic feature.

**Africa**



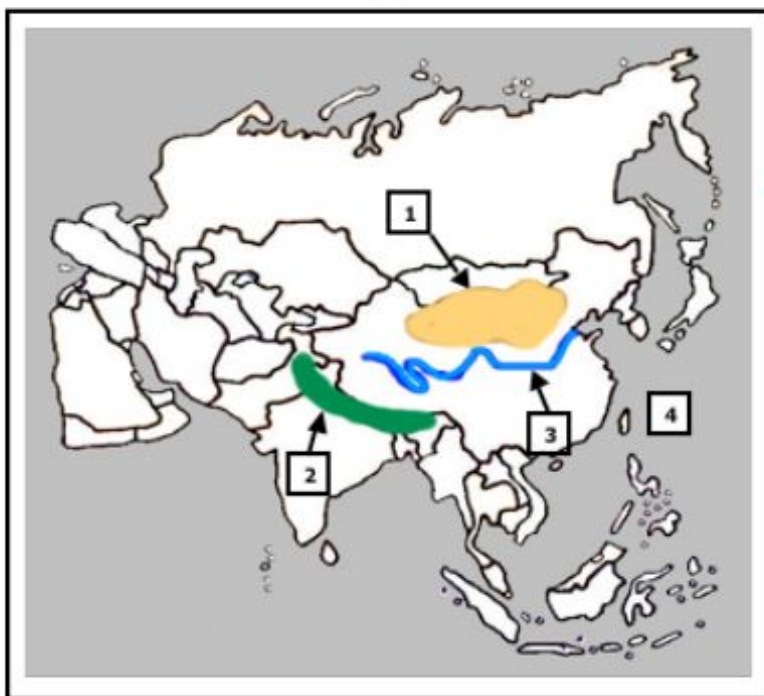
- |                   |               |                   |
|-------------------|---------------|-------------------|
| Alps Mtns         | Himalaya Mtns | Atlas Mtns        |
| Niger River       | Gobi Desert   | Sahara Desert     |
| Italian Peninsula | Nile River    | Mediterranean Sea |

1. \_\_\_\_\_
2. \_\_\_\_\_
3. \_\_\_\_\_
4. \_\_\_\_\_

Label the ocean above

\_\_\_\_\_

**Asia**

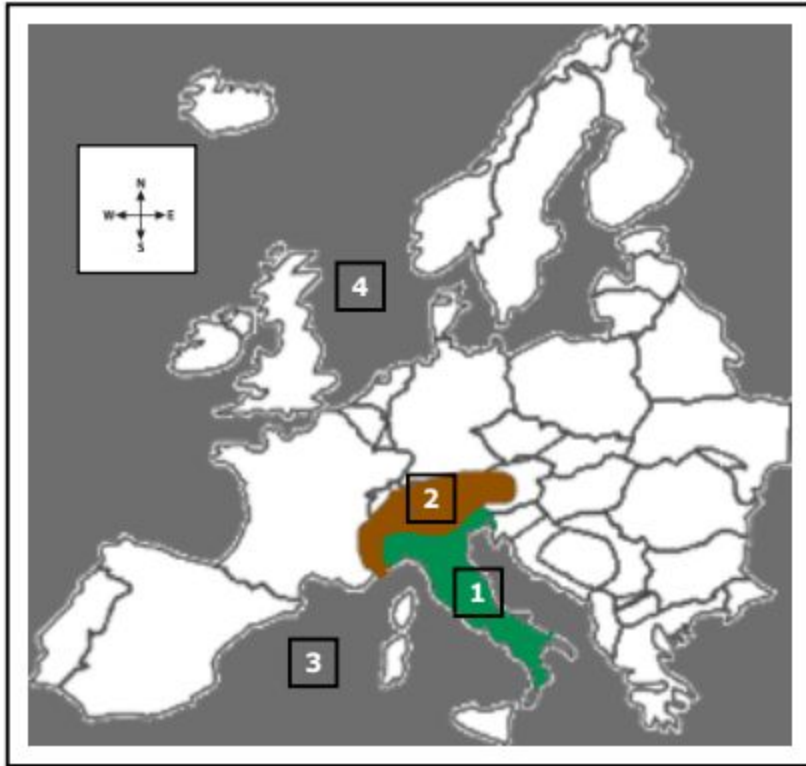


1. \_\_\_\_\_
2. \_\_\_\_\_
3. \_\_\_\_\_
4. \_\_\_\_\_

What **country** contains the river labeled #3?

\_\_\_\_\_

**Europe**



1. \_\_\_\_\_
2. \_\_\_\_\_
3. \_\_\_\_\_

What **direction** is the Mediterranean Sea from Europe?

\_\_\_\_\_

What continent is **south** of the Mediterranean Sea?

\_\_\_\_\_

Explain the difference between a **peninsula** and a **bay**.

\_\_\_\_\_

\_\_\_\_\_

Complete the chart below by choosing **3 different geographic features** of your choice.

Geographic Feature	Continent where the feature is located	Other fact about the geographic feature